

# Lesson 1

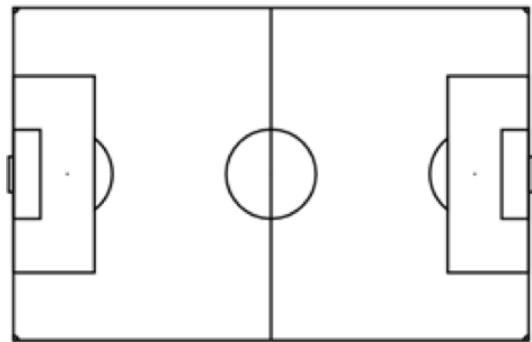
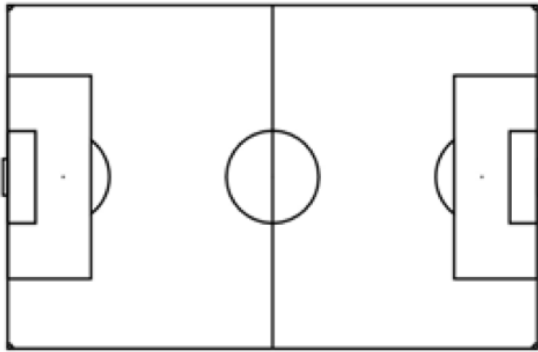
## Worksheet 1.3

### Positions and Formations

Mark 11 "X"s for each formation below to indicate the player positions.

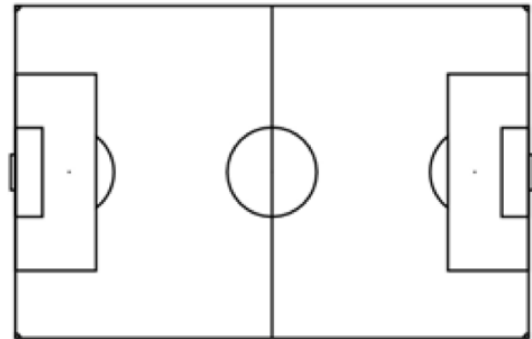
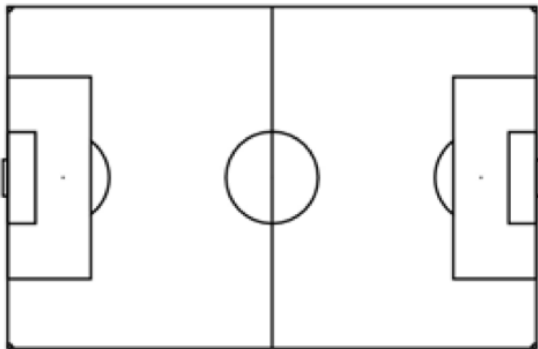
Draw a **3-5-2** formation

Draw a **3-2-5** formation



Draw a **4-3-3** formation

Draw a **4-4-2** formation



1. Which formation above has the most number of forwards?
2. Which formation above has the most number of midfielders?